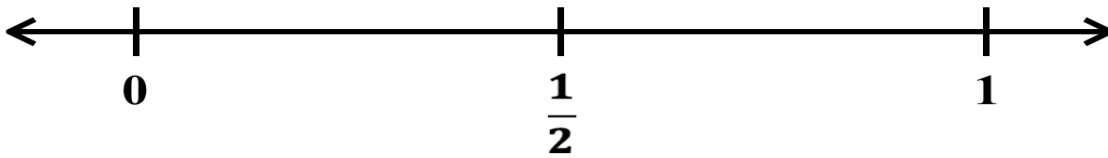


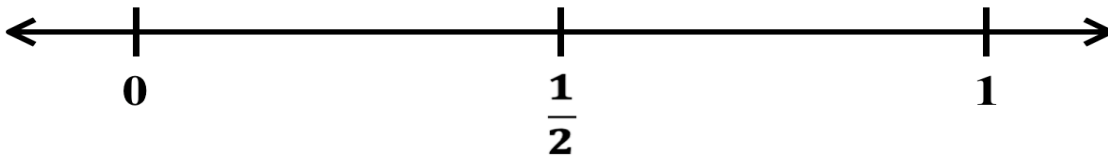
Chocolate Chocolate Chip Brownies - Part 2

Express the following parts of parts on a number line.

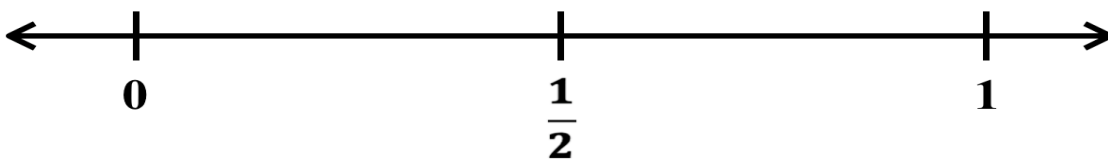
1. Ms. Noh eats $\frac{1}{2}$ of $\frac{1}{4}$ Ms. Noh eats _____ of the entire pan



2. Ms. Noh eats $\frac{1}{2}$ of $\frac{1}{8}$ Ms. Noh eats _____ of the entire pan



3. Ms. Noh eats $\frac{1}{2}$ of $\frac{1}{2}$ Ms. Noh eats _____ of the entire pan



Fill in the following table using the fractions above.


First fraction	Second fraction	Product

What patterns do you notice?

Express the following parts of parts on a number line.


4. Ms. Noh eats $\frac{1}{2}$ of $\frac{1}{3}$

Ms. Noh eats _____ of the entire pan




5. Ms. Noh eats $\frac{1}{2}$ of $\frac{1}{6}$

Ms. Noh eats _____ of the entire pan



6. Ms. Noh eats $\frac{1}{2}$ of $\frac{1}{12}$

Ms. Noh eats _____ of the entire pan



Fill in the following table using the fractions above.

First fraction	Second fraction	Product

What patterns do you notice?
